

ROUND I: Similarity and Pythagorean theorem

ALL ANSWERS MUST BE IN SIMPLEST EXACT FORM OR AS DIRECTED IN THE PROBLEM

1. If five foot- one inch tall Elaine casts an 84 inch shadow, then how tall is her friend Jerry if he has a shadow at the same time which is one foot shorter than hers? Give your answer in feet and nearest inch.

2. The altitude to the hypotenuse of a right triangle has length 10 and divides the hypotenuse into two pieces, one 21 units longer than the other. Find the length of the shorter of these two pieces.

3. Let \overline{CB} be a leg of the right triangle of least perimeter whose sides have integral lengths, whose hypotenuse is one unit longer than CB , and in which $CB \geq 100$. Find CB .


ANSWERS

(1 pt) 1. _____

(2 pts) 2. _____

(3 pts) 3. _____

Mass. Academy, Tahanto, Westborough



January 10, 2001

WOCOMAL Varsity Meet

ROUND II: Algebra 1 - open

ALL ANSWERS MUST BE IN SIMPLEST EXACT FORM OR AS DIRECTED IN THE PROBLEM

1. Solve: $12\left(\frac{1}{x-2}\right) = 32\left(\frac{1}{x+8}\right)$

2. A person born in the year $x^2 + 73$ celebrated her 14th birthday in the year $(x+1)^2$.
In what year was she born?

3. Ann is twice as old as Judy was when Ann was as old as Judy is now. If the sum of their present ages is 56, how old is each now?

ANSWERS

(1 pt) 1. $x =$ _____

(2 pts) 2. _____

(3 pts) 3. ANN _____ JUDY _____

Quaboag, South, Tantasqua

ROUND III: Functions

ALL ANSWERS MUST BE IN SIMPLEST EXACT FORM OR AS DIRECTED IN THE PROBLEM

1. For $y = \frac{5x-3}{4}$, find the formula for the inverse function in the form $y =$ an expression involving x .

2. If $f(4x+3) = 2x+1$, find $f(-9)$.

3. Find all values of x for which $f(f(x)) = 11f(x)$, given that $f(x) = x^2 - x$.

ANSWERS

(1 pt) 1. $y =$ _____

(2 pts) 2. _____

(3 pts) 3. _____

Doherty, Hudson, Shrewsbury

ROUND V: Analytic geometry of straight lines and conic sections

ALL ANSWERS MUST BE IN SIMPLEST EXACT FORM OR AS DIRECTED IN THE PROBLEM

1. What equality will make the lines with these equations parallel?

$$ax + by = c \quad \text{and} \quad x-d = e(y-f)$$

2. The area of an ellipse is given by the expression πab where a and b are half the lengths of the major and minor axes. Find the area of the ellipse with equation

$$4x^2 + 9y^2 - 54y + 45 = 0.$$

3. Find the coordinates of the focal point of the parabola with equation $16y = x^2 - 4x + 52$.

ANSWERS

(1 pt) 1. _____

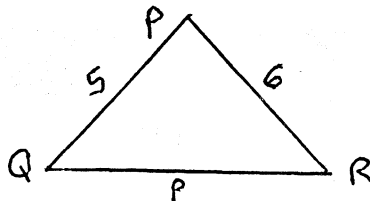
(2 pts) 2. _____

(3 pts) 3. (,)

Auburn, Bancroft, QSC

TEAM ROUND: Topics of previous rounds and open

ALL ANSWERS MUST BE IN SIMPLEST EXACT FORM OR AS DIRECTED IN THE PROBLEM and ON THE SEPARATE TEAM ROUND ANSWER SHEET



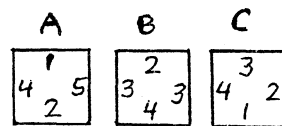
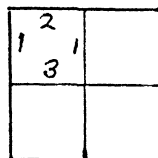
1. Write a condition in terms of side length p so that $\triangle PQR$ is acute.

2. Mr. T's December salary was $\$D$. He got a 10% raise for the month of January, but he received 10% less in February than in January. In terms of D , what was Mr. T's average salary for the 3 months?

3. Evaluate $f(10,6)$ given:

$$f(x,y) = \begin{cases} f(x-y, y-1) + 2 & \text{when } x > y > 0 \\ f(y-x, x-1) + 1 & \text{when } y > x > 0 \\ 10 & \text{otherwise} \end{cases}$$

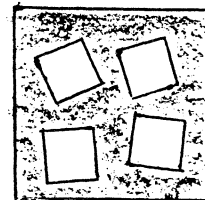
4. How many different ways can tiles A, B, and C be placed in the open squares such that bordering numbers are equal? All three tiles must be used for each solution. Tiles may be rotated but not flipped over.



5. The circle with equation $(x-4)^2 + (y-2)^2 = 52$ passes through $A(0,8)$. How many distinct chords of the circle have integer lengths?
 endpoint A and

6. Solve for x : $|x-2|^2 + 3|x-2| = 4$

7. A side of the large square is equal to the square of a side of each small square. The area of the shaded region is 60. Find the side of the large square.



8. For n a positive integer, let $f(n) = n(n+1)(n+2)$.

Find n if $\frac{f(8)}{f(n)} = f(4)$.

9. Of 60 people in a room, $\frac{2}{3}$ are women and $\frac{2}{5}$ of the people have blonde hair. What are the maximum and minimum numbers of women in the room whose hair is not blonde?

January 10, 2001

WOCOMAL Varsity Meet ANSWERS

ROUND I 1. 1 pt 4 ft 4 in 4'4"
 sim
 Pyth 2. 2 pts 4
 3. 3 pts 112

ROUND II 1. 1 pt 8
 alg 1 2. 2 pts 1922
 3. 3 pts ANN 32 JUDY 24

ROUND III 1. 1 pt $y = \frac{4x+3}{5}$ OR $\frac{4}{5}x + \frac{3}{5}$
 funct 2. 2 pts -5
 3. 3 pts -3, 0, 1, 4 any order

ROUND IV 1. 1 pt 120
 comb 2. 2 pts 3240
 3. 3 pts 106

ROUND V 1. 1 pt $-\frac{a}{b} = \frac{1}{e}$ OR equivalent equation
 analyt 2. 2 pts 6π
 3. 3 pts (2, 7)

TEAM ROUND 2 pts each

$\sqrt{11} < p < \sqrt{61}$
 1. OR $11 < p^2 < 61$

2. 1.03 D OR $\frac{103D}{100}$
 OR 103% of D

3. 14

4. 0 or none

5. 28

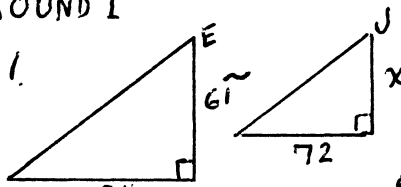
6. 1 or 3 need both

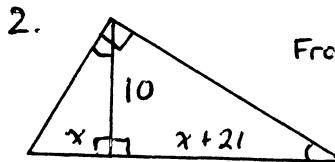
7. 10

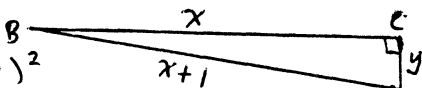
8. 1

9. MAX 36 MIN 16

ROUND I

1.  $\frac{x}{61} = \frac{72}{84}$
 $x = 52.2857$ in
 $\therefore 48 + 4$ in
 $\therefore 4$ ft 4 in

2.  From $\sim \Delta$'s or theorem
 $\frac{x}{10} = \frac{10}{x+21}$
 $x^2 + 21x - 100 = (x+25)(x-4) = 0, x=4$

3.  $x^2 + y^2 = (x+1)^2$
 $y^2 = 2x+1$ with $x \geq 100$
 and $2x+1$ a perfect square
 $\therefore 2x+1 = 225$ and $x = 112$

ROUND II

1. $12(x+8) = 32(x-2)$. May $\div 4$
 $3x + 24 = 8x - 16$
 $40 = 5x$ and $x = 8$

2. $x^2 + 73 + 14 = (x+1)^2$
 $87 = 2x + 1$
 $43 = x$
 Then $43^2 + 73 = 1922$

3.

| | | |
|------|-----|-------------|
| | now | then |
| Ann | a | j |
| Judy | j | j - (a - j) |

 } same difference between ages now and then
 $a + j = 56$ and $a = 2(2j - a)$
 $a + \frac{3}{4}a = 56 \leftarrow 3a = 4j$
 $a = 32$ and $j = 24$

ROUND III

1. Linear so switch x and y and solve for y
 $x = \frac{5y-3}{4}$
 $4x = 5y-3$
 $4x+3 = 5y$ and $y = \frac{4x+3}{5}$

ROUND III cont.

2. Set $4x+3 = -9$ and get $x = -3$.
 Then $f(-9) = 2(-3) + 1 = -5$

3. $(x^2-x)^2 - (x^2-x) = 11(x^2-x)$
 $(x^2-x)[x^2-x-11] = 0$
 $x(x-1)(x^2-x-12) = 0$
 $x(x-1)(x-4)(x+3) = 0$
 $x = 0, 1, 4, -3$

ROUND IV

1. $10C_3 = \frac{10!}{3!7!} = 120$

2. 4 digits, first not 0, none is 6, 4th is odd
 $8 \cdot 9 \cdot 9 \cdot 5 = 3240$

3. midnight to 1:45 am is 105 minutes or 210 half minutes
 The first 9 poem take 9 half min
 The next 90 2 digits, take 180 half min.
 $210 - 189 = 21$ half min remain for
 3-digit numbers and $21 \div 3 = 7$.
 $9 + 90 + 7 = 106$ poems

ROUND V

1. Make slopes = Use $y = mx + b$ form
 $ax + by = c \Rightarrow y = -\frac{a}{b}x + \frac{c}{b}$
 $x - d = e(y - f) \Rightarrow y = \frac{1}{e}x + \text{other terms}$
 $\therefore -\frac{a}{b} = \frac{1}{e}$

2. $4x^2 + 4y^2 - 54y = -45$
 $4x^2 + 4(y^2 - 6y + 9) = -45 + 81$
 $4x^2 + 4(y-3)^2 = 36$
 $\frac{x^2}{9} + \frac{(y-3)^2}{4} = 1 \Rightarrow a=3, b=2$
 Area = $\pi ab = 6\pi$

